
GEOGRAPHY

9696/31

Paper 3 Advanced Human Options

October/November 2016

INSERT

1 hour 30 minutes

READ THESE INSTRUCTIONS FIRST

This Insert contains the Photograph and all the Figures referred to in the questions.



This document consists of **5** printed pages and **3** blank pages.

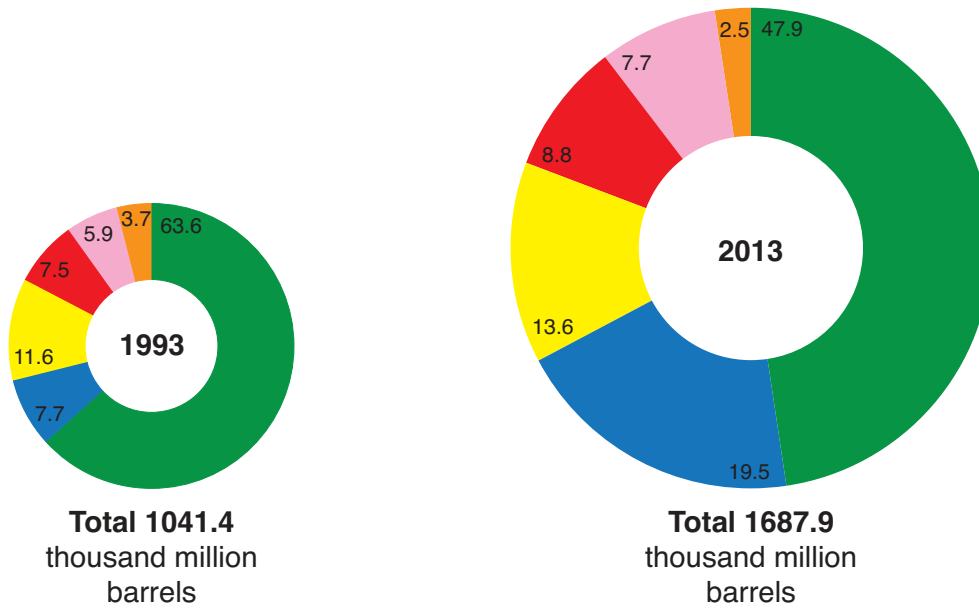
Photograph A for Question 1

A farmer applying chemical fertiliser to intensify agriculture in an LEDC in Asia



Fig. 1 for Question 3

Proven oil reserves, by world region, in 1993 and 2013

**Key**

Percentage

- Middle East
- South and Central America
- North America
- Europe and Eurasia
- Africa
- Asia Pacific

Fig. 2 for Question 6

A product life cycle for a tourist destination

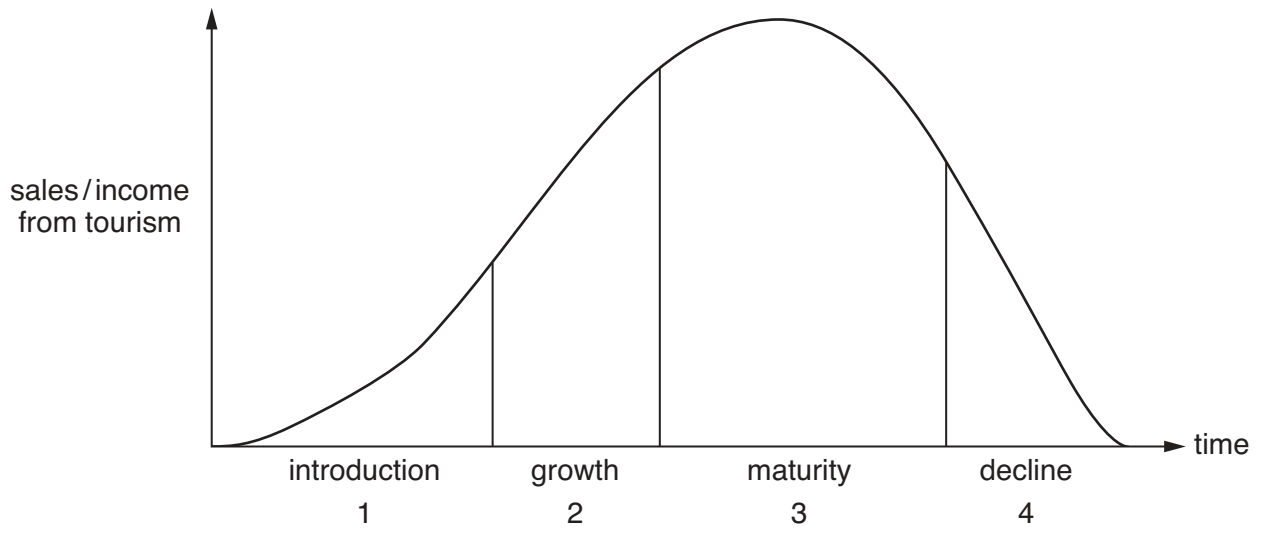
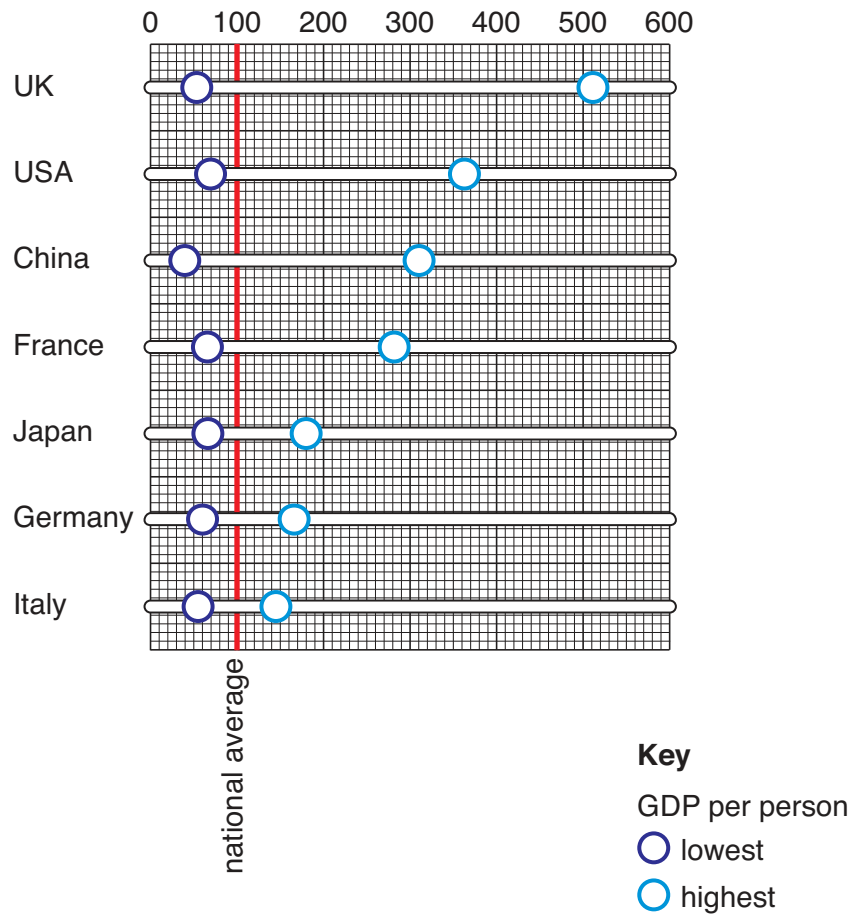


Fig. 3 for Question 8

GDP per person for the poorest region and the richest region of selected countries, as a percentage of the national average, 2011



BLANK PAGE

Permission to reproduce items where third-party owned material protected by copyright is included has been sought and cleared where possible. Every reasonable effort has been made by the publisher (UCLES) to trace copyright holders, but if any items requiring clearance have unwittingly been included, the publisher will be pleased to make amends at the earliest possible opportunity.

To avoid the issue of disclosure of answer-related information to candidates, all copyright acknowledgements are reproduced online in the Cambridge International Examinations Copyright Acknowledgements Booklet. This is produced for each series of examinations and is freely available to download at www.cie.org.uk after the live examination series.

Cambridge International Examinations is part of the Cambridge Assessment Group. Cambridge Assessment is the brand name of University of Cambridge Local Examinations Syndicate (UCLES), which is itself a department of the University of Cambridge.